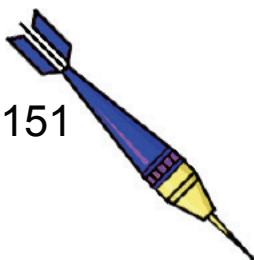


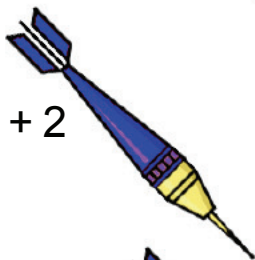
**Objectif : Calculer des additions en ligne et en colonnes.**

1) Calcule ces additions en ligne et relie chaque flèche à sa cible.


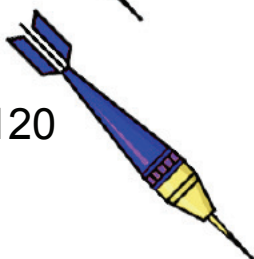
$$512 + 234 + 151$$




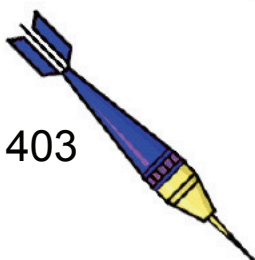
$$25 + 462 + 2$$



$$1242 + 534 + 3120$$



$$6135 + 57 + 403$$



2) Effectue ces additions en colonnes.

$$\begin{array}{r} 18 \\ 1586 \\ + 996 \\ \hline \end{array}$$

$$\begin{array}{r} 2160 \\ 305 \\ + 3697 \\ \hline \end{array}$$

$$\begin{array}{r} 4 \\ 86 \\ 397 \\ + 8501 \\ \hline \end{array}$$

$$\begin{array}{r} 6875 \\ 3521 \\ + 5896 \\ \hline \end{array}$$

$$\begin{array}{r} 5874 \\ 1894 \\ + 2632 \\ \hline \end{array}$$

$$\begin{array}{r} 23 \\ 7080 \\ 7091 \\ + 6 \\ \hline \end{array}$$